



13 Colonies Map Unit

by Carrie Fernandez and [WriteBonnieRose](#)

© Copyright 2023, Daily Skill Building

Select graphics used courtesy of [Blended Learning in Texas](#).

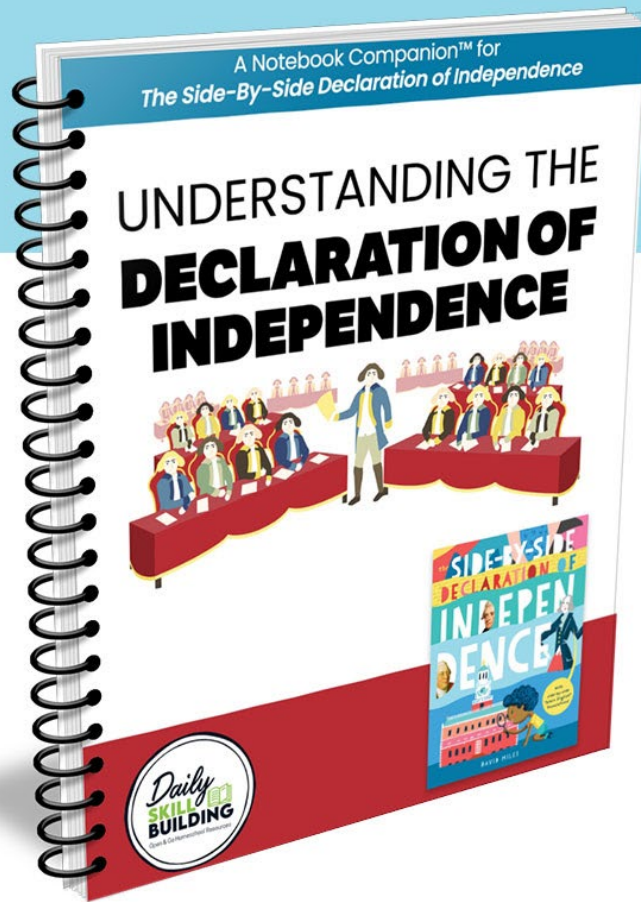
All rights reserved. No part of this work may be reproduced or distributed in any form by any means—graphic, electronic, or mechanical, including photocopying, recording, taping, or storing in information storage or retrieval systems—without the prior written permission from the publisher.

Original purchaser is granted permission to print copies for use within his or her immediate family only. For co-op licenses, please email support@homeschoolgiveaways.com.


For free homeschool resources visit Homeschoolgiveaways.com.

Study the Declaration of Independence

Taking a **complex topic** and making it **EASY** for students to understand



CREATED FOR
GRADES 3 & UP



Visit www.dailyskillbuilding.com for more information.


13 American Colonies

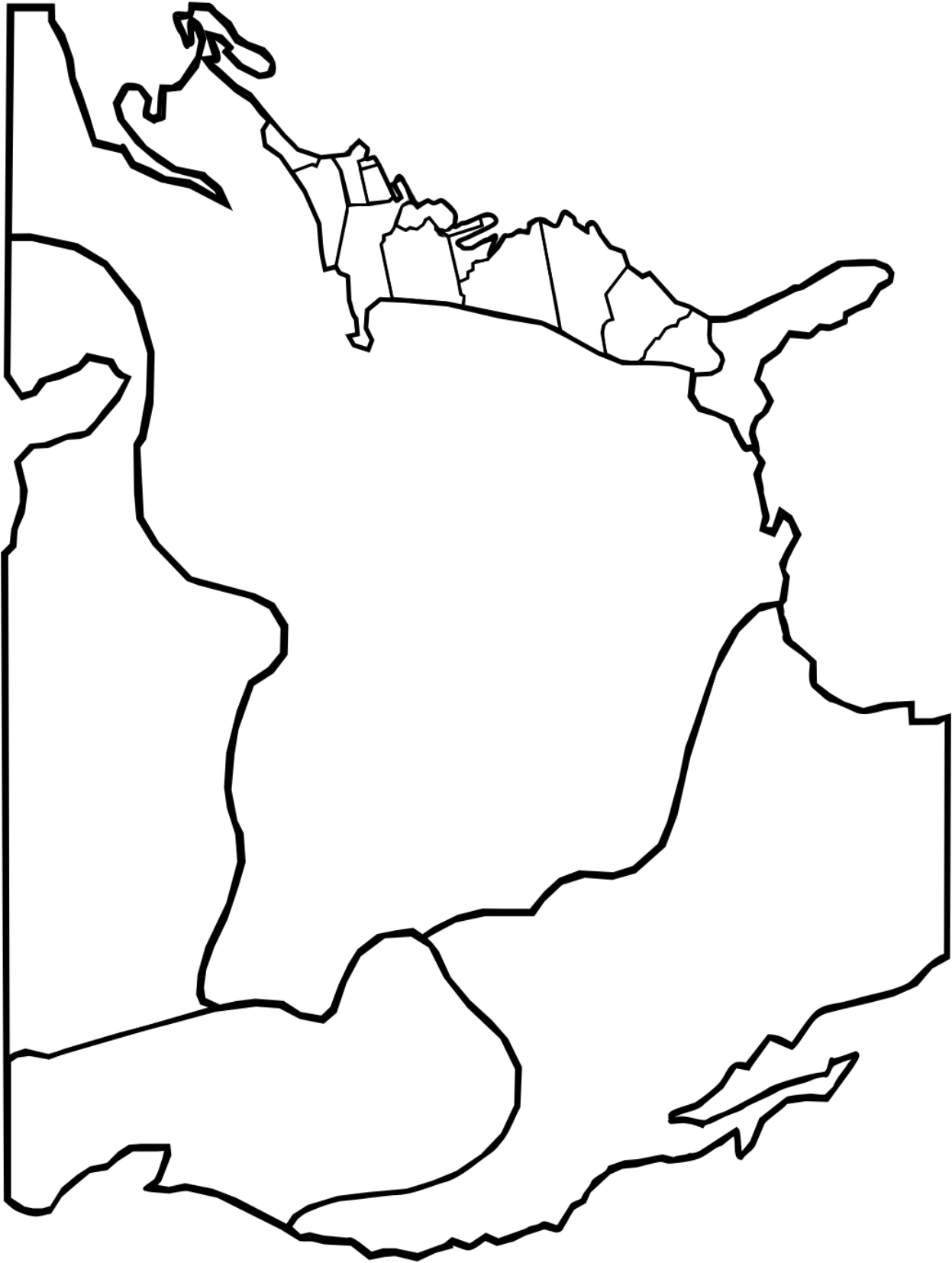
Follow the directions to complete the following three maps.

1. Find a map of the 13 colonies that became the United States of America in a book or, with a parent's permission, on the Internet. See if you can label each of the colonies on the map below. For an added challenge, add the locations of Jamestown, St. Augustine, and Plymouth Colony to the map.

2. As we've read, the British weren't the only empire to colonize the area of the United States and the lands that are now Canada and Mexico. Label the 13 colonies as you did on the previous map along with Jamestown, St. Augustine, and Plymouth Colony. Then see if you can label which of the areas shown on the map was French territory, what other area was British territory, what area was unclaimed territory, and what areas were Spanish territories.

3. For one final challenge, draw the approximate borders of the colonies and territories you've just labeled. Then label each area on the map below.









Answer Key

